











MAP GRID

Name _____

Map Skills: Location on a Grid

Direction: Use the map and key to complete the grid and answer the questions.

5					
4					
3					
2					
1					
	A	B	C	D	E

KEY	
tree.....	
ice cream...	
park bench...	
play area...	
trash can...	
fountain...	
bridge...	

Name the location of each item on the map:

play area: B4, E2	ice cream:
trash can:	fountain:
park bench:	tree: