





# Math Exam

## 4<sup>th</sup> Quarter

- What time is it?, select the right answer

	<div>It's 3 o'clock.</div> <div>It's 20 past 3.</div> <div>It's 4 o'clock.</div>		<div>It's half past 1.</div> <div>It's 1 o'clock.</div> <div>It's 6 o'clock.</div>
	<div>It's 5 past 8.</div> <div>It's 8 o'clock.</div> <div>It's 2 o'clock.</div>		<div>It's 11 o'clock.</div> <div>It's 25 past 11.</div> <div>It's 5 o'clock.</div>

**Find the elapsed time. Drag the correct answer.**

- 7:45 P.M. to 8:15 P.M. \_\_\_\_\_
- 2:30 P.M. to 4:50 P.M. \_\_\_\_\_
- 7:45 A.M. to 9:50 A.M. \_\_\_\_\_
- 11:30 P.M. to 2:10 A.M. \_\_\_\_\_
- 11:25 A.M. to 3:10 P.M. \_\_\_\_\_

30 min

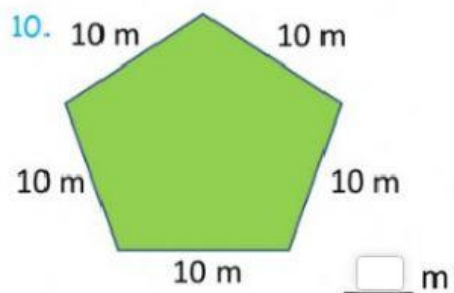
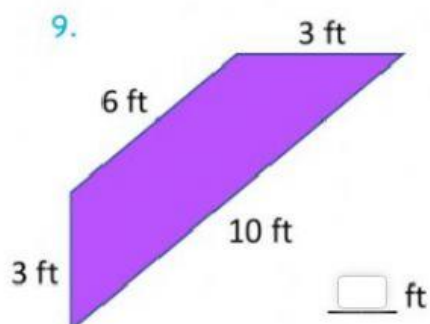
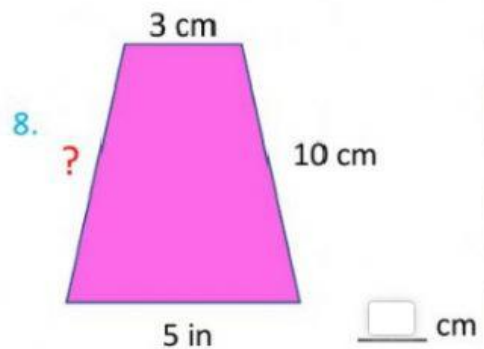
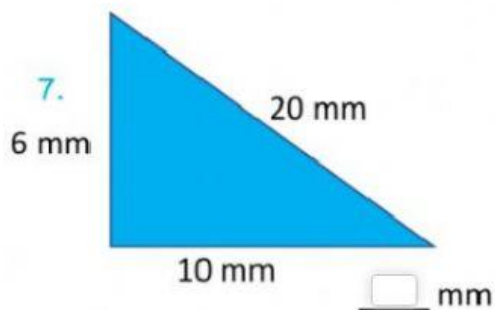
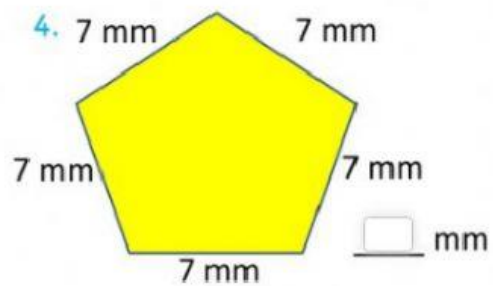
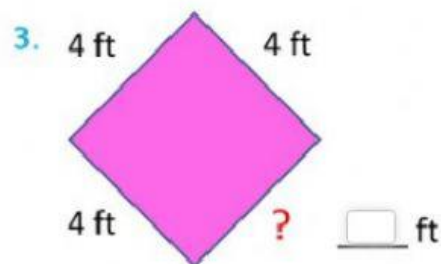
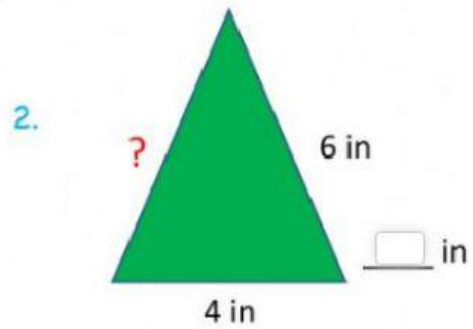
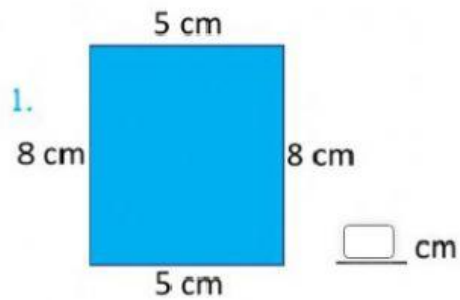
3 h 45 min

2 h 5 min

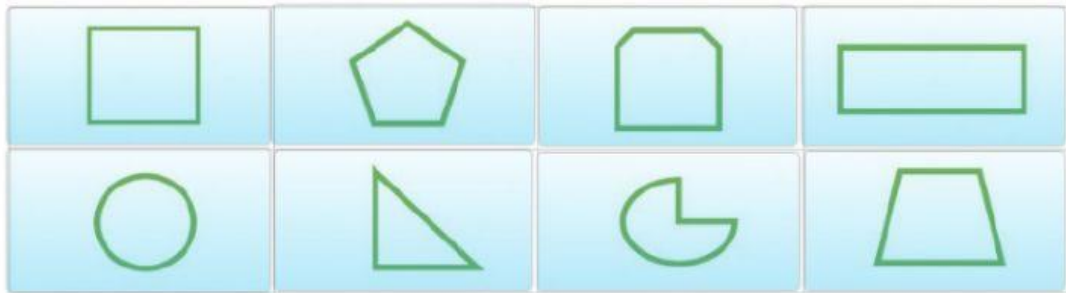
2 h 20 min

2 h 40 min

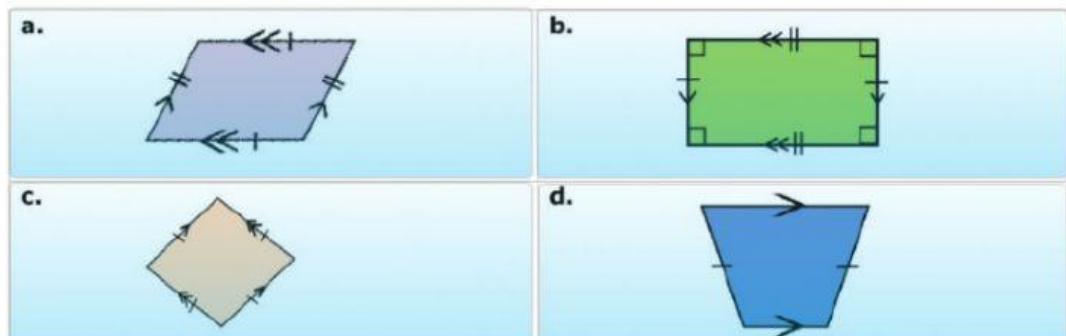
Find the perimeter of the following shapes.



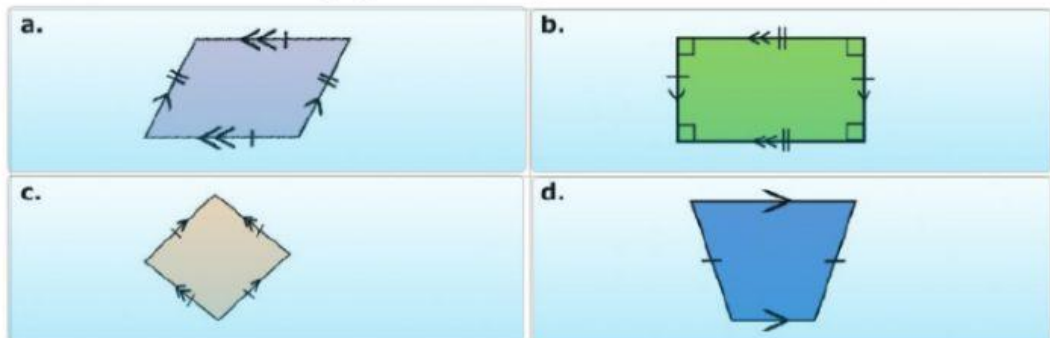
3. Which of these figures are quadrilaterals?



4. Which of the following figures is a rhombus?



5. Which of the following figures is a trapezoid?



6. Which of the following figures is a parallelogram?

