









NOME: _____ DATA: ____/____/____

PROFESSORA: _____ 2º ANO: _____

MATEMÁTICA

- 1) COMPLETE COM O ANTECESSOR E O SUCESSOR DE CADA NÚMERO NOS VAGÕES DO TRÊM.



2) DECOMPOR OS NUMERAIS DO MESMO JEITO QUE FIZ NA LETRA A.

A) $94 = 90 + 4$

B) $67 =$ _____


C) $18 =$ _____

D) $36 =$ _____

E) $99 =$ _____

F) $52 =$ _____

G) $65 =$ _____



3) COMPOR OS NÚMEROS DO MESMO JEITO QUE FIZ NA LETRA A.

A) $50 + 6 = 56$

B) $90 + 7 =$ _____

C) $80 + 5 =$ _____

D) $40 + 3 =$ _____

E) $70 + 2 =$ _____

F) $50 + 5 =$ _____

G) $10 + 9 =$ _____



4) INDIQUE QUANTAS DEZENAS E QUANTAS UNIDADES TEM CADA NÚMERO, COMO EU FIZ NA LETRA A.

A) $65 = 6 \text{ DEZENAS} + 5 \text{ UNIDADES}$

B) $71 =$ _____

C) $49 =$ _____

D) $34 =$ _____

E) $85 =$ _____

F) $22 =$ _____

