

Evaluasi Akhir Semester
Semester II Tahun Pelajaran 2020 – 2021

Kelas :
Mata Pelajaran : CIPP Math
Waktu : 60 menit

Nama : _____

Tanggal : _____

Nilai

Tanda tangan
Edukator




1. Fill the blanks !



2. Read the cylinder and write your reading!

A



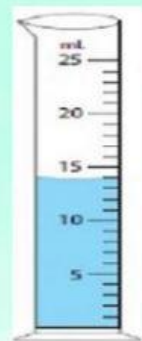
_____ ml

B



_____ ml

C



_____ ml



3. Match!



nearly empty



half full



full



nearly full

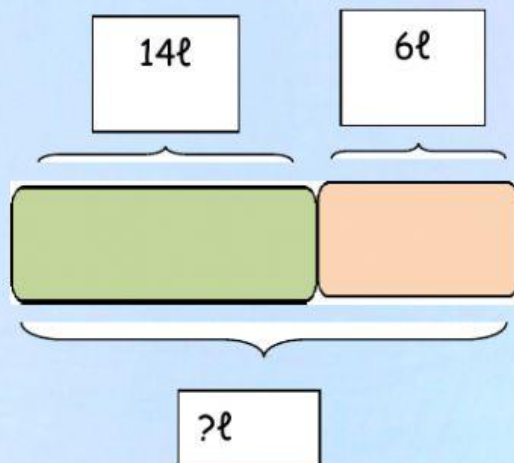


empty





4. A water tank contains 14ℓ of water. Aya fills up the tank with 6ℓ of water. How much water does the water tank contains now?



Answer :

$$\boxed{14\ell} \quad + \quad \boxed{6\ell} \quad = \quad \boxed{}$$

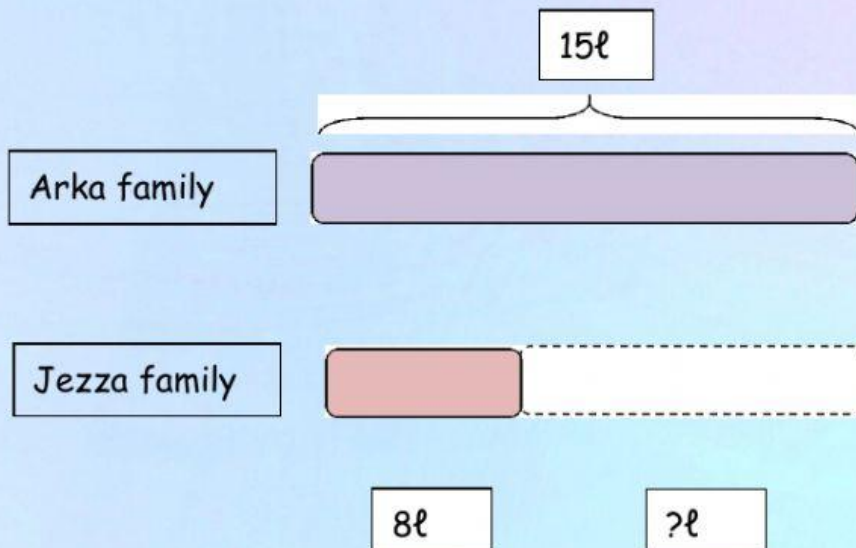


The tank contains

ℓ of water now



5. On Sunday, Arka family used 15ℓ of water. Jezza family used 8ℓ of water on the same day. How much more water did Arka family used than Jezza family?



Answers :

$$\boxed{15\ell} \quad \bigcirc - \quad \boxed{8\ell} \quad \bigcirc = \quad \boxed{}$$



Arka family used ℓ more water than Jezza family