

Evaluasi Akhir Semester
Semester II Tahun Pelajaran 2020 – 2021

Kelas :
Mata Pelajaran : CIPP Math
Waktu : 60 menit

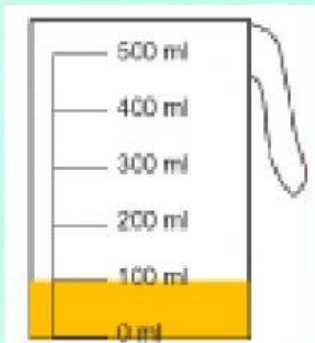
Nama : _____

Tanggal : _____

Nilai	Tanda tangan Edukator



1. Fill in the blanks!



The volume of liquid is

ml



The capacity of the jug is

ml



2. Look at the picture!



The of container varies according to how much content it can hold.

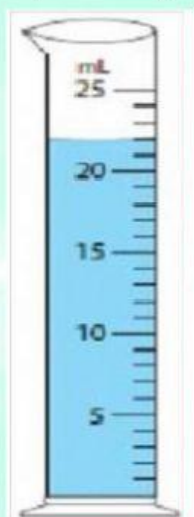


The amount of liquid within the container



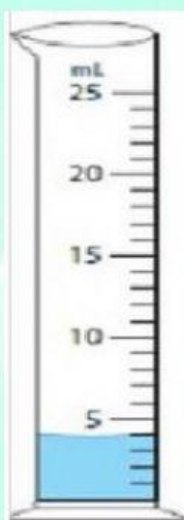
3. Read the cylinder and write your reading!

A



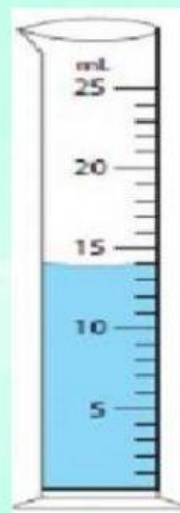
_____ ml

B



_____ ml

C



_____ ml



Answer this questions!



a. Wich cylinder has **the most** amount of water



b. Wich cylinder has **the last** amount of water



c. Cylinder has **more** water than jug B and C



4. Match!



nearly empty



half full



full



nearly full



empty





5. These are some containers which can contain less than 1 litre of liquid.



A



B



C



that can hold less than 1 litre of liquid



6. Nicho filled similar scoop with all the water from bucket



=



= 1 litre



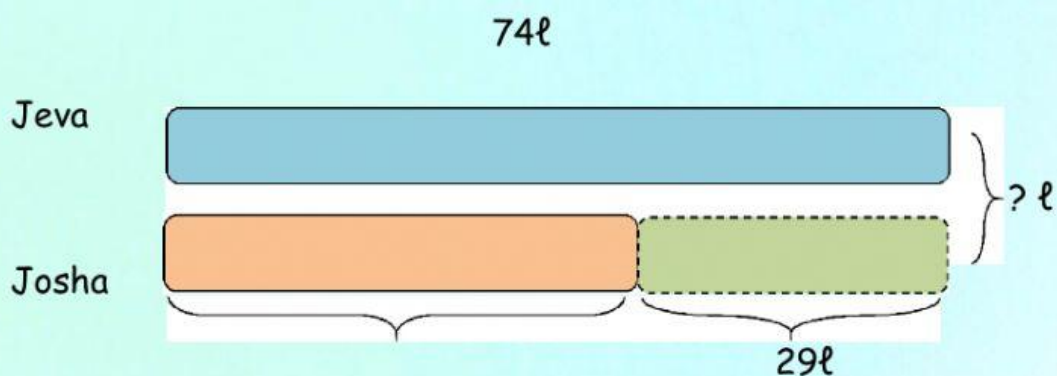
=



litre



7. Jeva used 74 ℓ of oil in a week. Josha used 29 oil less than Jeva. How many litres of oil did they use altogether?





Answers :

First, find the amount of oil Josha used

--	--	--	--



Josha used

--

ℓ of oil.

--	--	--	--



Jeva and Josha used

--

ℓ of oil altogether