

Level 4

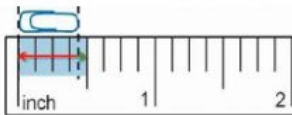
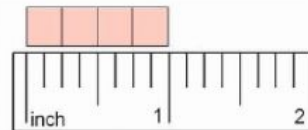
Student Name: _____ Date: _____

1. Create a ruler by drawing the lines and adding the numbers.

2. Analyze the measuring cup. What does it measure?

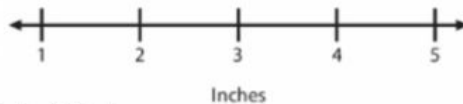


3. Compare the objects. How long is each object?

4. Construct a line plot based on the table.

Length of Sticks



PMC Method Used: _____

Completed Task: Yes _____ No _____

Length of Sticks	
Sticks	Inches
Stick 1	2
Stick 2	4
Stick 3	2
Stick 4	1
Stick 5	1