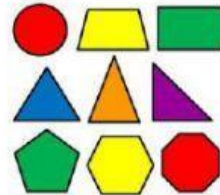



Student Name: _____

Level 3

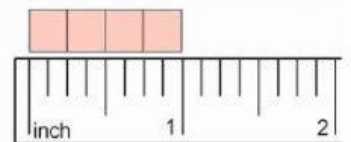
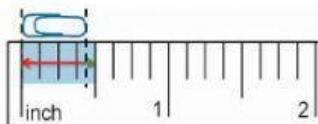
1. A ruler is used to measure the length of an item. Where is the ruler?
Point to the ruler.



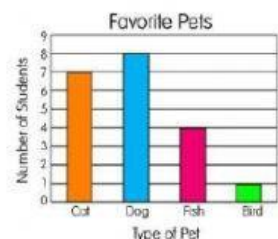
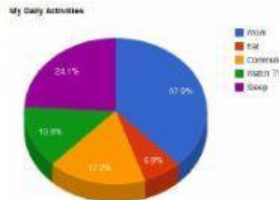
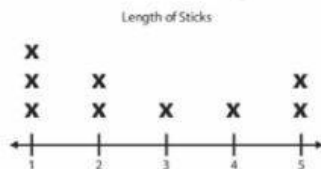
2. Analyze the pictures. Which picture shows the correct tool for measuring a liquid?



3. Compare the objects. Which object measures 0.5 inches?



4. Show the line plot. Which graph displays a line plot?



PMC Method Used: _____

Completed Task: Yes _____ No _____