









Name

Date

COUNTING DIMES SHEET 2

Count the dimes. Work out the amounts in cents.

	= ___ ¢
	= ___ ¢
	= ___ ¢
	= ___ ¢
	= ___ ¢
	= ___ ¢
	= ___ ¢
	= ___ ¢

Fill in the correct amounts

___ dimes makes 40¢

___ dimes makes 20¢

___ dimes makes 60¢

___ dimes makes 50¢

___ dimes makes 30¢

___ dimes makes 80¢