

Name: \_\_\_\_\_ Date: \_\_\_\_\_

## GLAT (computation)

Use your math book to show your working.

### Add

1. 
$$\begin{array}{r} 354 \\ + 213 \\ \hline \hline \end{array}$$

2. 
$$\begin{array}{r} 4,863 \\ + 3,128 \\ \hline \hline \end{array}$$

3. 
$$\begin{array}{r} \$52.98 \\ + \$2.26 \\ \hline \hline \end{array}$$

4.  $2,436 + 5,408 = \square$

$$\begin{array}{r} \square, \square \square \square \\ + \square, \square \square \square \\ \hline \square, \square \square \square \end{array}$$

### Subtract

5. 
$$\begin{array}{r} 649 \\ - 245 \\ \hline \hline \end{array}$$

6. 
$$\begin{array}{r} 852 \\ - 518 \\ \hline \hline \end{array}$$

7.  $9,463 - 5,182 = \square$

$$\begin{array}{r} \square, \square \square \square \\ - \square, \square \square \square \\ \hline \square, \square \square \square \end{array}$$

8. 
$$\begin{array}{r} \$50.55 \\ - \$29.89 \\ \hline \hline \end{array}$$

## Multiply

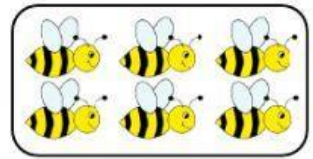
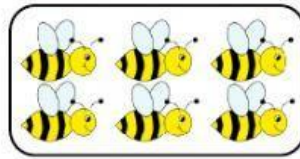
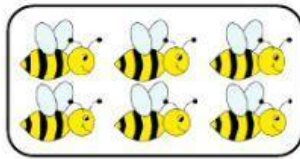

9. 
$$\begin{array}{r} 526 \\ \times 5 \\ \hline \end{array}$$

10. 
$$\begin{array}{r} 4,783 \\ \times 3 \\ \hline \end{array}$$

11. 
$$\begin{array}{r} 9,233 \\ \times 2 \\ \hline \end{array}$$

12.  $2,300 \times 7 = \square$

$$\begin{array}{r} \square, \square \square \square \\ \times \quad \square \\ \hline \square, \square \square \square \end{array}$$



13. Write the **repeated addition sentence** that is represented by the model above.

Answer:  $\square + \square + \square + \square = \square$



14. Write the **multiplication sentence** that is represented by the array above.

Answer:  $\square \times \square = \square$