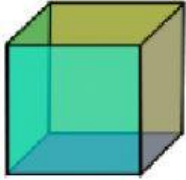
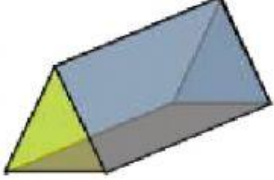
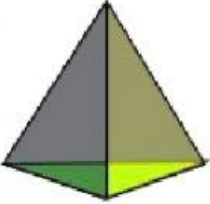



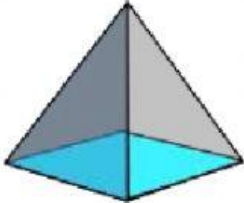



3D SHAPE PROPERTIES SHEET

Fill in the name, and number of faces, edges and vertices for each shape.

Name: Faces: Edges: Vertices:		Name: Faces: Edges: Vertices:	
Name: Faces: Edges: Vertices:		Name: Faces: Edges: Vertices:	
Name: Faces: Edges: Vertices:		Name: Faces: Edges: Vertices:	
Name: Faces: Edges: Vertices:		Name: Faces: Edges: Vertices:	

cylind	square	pyramid	triangular pyramid
cube	sphere	triangular	prism

Three Types of Angles

Label each angle as right, more than, or less than.

