

Friday 21st May, 2021

Term 3

Weekly Test 5- Mathematics

A. Look at the table and answer the following questions.

Do not type the dollar signs for the number statements.

Big Foot	Peanuts	Bourbon	Tortillaz
			
\$5	\$6	\$7	\$5

1. Which snack is **most expensive**? _____

2. How much for 2 packs of nuts?

Write your number statement. _____

3. How much does the Big Foot and Tortillaz cost **in all**?

Write your number statement. _____





4. Which **three snacks** could I buy for exactly \$17?

a) _____, _____ and _____

b) Fill in the missing money to make \$17 to buy the snacks.



B. Select the activities that take **more** claps to complete.

<p>Eating a banana</p> 	<p>Getting a haircut</p> 	<p>Reading a novel</p> 	<p>Tying shoelace</p> 
--	--	---	---

C. Select the activities that take **less** claps to complete.

<p>Writing a story</p> 	<p>Brushing hair</p> 	<p>Putting on shirt</p> 	<p>Doing the laundry</p> 
--	--	--	--

D. Look at the number of claps each activity may take to complete.
Order the activities from the shortest time to the longest time based
on the number of claps.

Putting on shoes



60 claps

Eating a snack



120 claps

Drawing a picture



80 claps

Shortest time		Longest time