





Name: \_\_\_\_\_

Subject: Mathematics

### Geometry



Shapes	
circle	
triangle	
square	
rectangle	

Study the picture above carefully then answer the questions.

#### Questions

1. How **many** different shapes are on the house?
2. How many **triangles** are on the sun?
3. What is the plural of the shape of the **smoke** coming from the chimney?  
\_\_\_\_\_
4. The **seesaw** is in the shape of a \_\_\_\_\_ and a \_\_\_\_\_.
5. How many **circles** are in the picture?
6. What is the shape of the **door**? \_\_\_\_\_
7. Each **window** on the house is a \_\_\_\_\_.
8. There are  **circles** in front of the door.
9. A \_\_\_\_\_ is at the **top** of the tree.
10. The trunk of the tree is a \_\_\_\_\_.