

Part 1: Flags of Gaelic Nations




1) UK




2) England



3) Scotland



4) Wales




5) Northern Ireland



6) Republic of Ireland



7) British Naval Ensign



8) Isle of Man



9) English Royal Banner

Task: Use the flags shown to answer the ratio questions below

1. What is the ratio of Irish flags to total number of flags

_____ to _____

2. What is the ratio of flags with the colour red to flags with Dragons?

_____ to _____

3. What is the ratio of flags with red crosses to flags with Lions?

_____ to _____

4. What is the ratio of flags with any colour blue to flags with the colour green?

_____ to _____

5. What is the ratio of flags with large horizontal and vertical crosses (+) to total flags with large criss cross crosses (ex: X)

_____ to _____

6. What is the ratio of total flags to flags with feet (yes feet, look closely)?

_____ to _____

Part 2: Flags of the Middle East (Asia)



Task: Use the flags shown to answer the ratio questions below

7. What is the ratio of flags with stars to flags with moons?

_____ to _____

8. What is the ratio of flags with the colour blue to flags with the colour green?

_____ to _____

9. What is the ratio of flags with a green triangle to flags with a red triangle?

_____ to _____

10. What is the ratio of flags with horizontal black rectangles to flags that have red horizontal rectangles?

_____ to _____

11. What is the ratio of flags with symbols *that aren't moons or stars* to flags with horizontal zig-zags?

_____ to _____

Part 3: Flags of Canadian Provinces and Canada





Task: Use the flags shown to answer the ratio questions below

12. What is the ratio of provincial flags with the colour blue to flags with a lion on it?

_____ to _____

13. What is the ratio of flags with trees *plus* a ship on it to the number of flags with a green stripe?

_____ to _____

14. What is the total number of flags with a crest () to the number of flags that have a red cross  ?

_____ to _____

15. What is the ratio of flags with a star on it to the number of flags with a maple leaf on it?

_____ to _____