

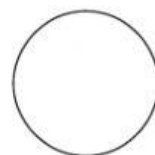




NOME: _____

NUMERE AS PARTES DO CORPO RELACIONANDO COM OS SENTIDOS.



1 AUDIÇÃO

2 OLFATO

3 PALADAR

4 VISÃO

5 TATO