

WORKSHEET



(i) Name of the instruments: _____.

(ii) It is used for measuring _____.



(i) Name of the instruments: _____.

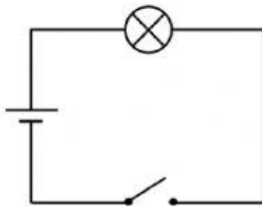
(ii) It is used for measuring _____.



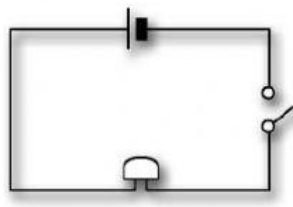
(i) Name of the instruments: _____.

(ii) It is used for measuring _____.

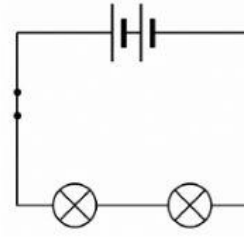
IDENTIFY THE CIRCUIT THAT SHOWS:



A



B



C

(a) A battery, a bell and a switch.

_____.

(b) A cell , a bulb and a switch

_____.

(c) Two cells and two bulbs with closed switch

_____.