



Name: \_\_\_\_\_

## Repeated Addition


Match the statement to the correct set.




2 sets of  
5 bananas  
 $5+5=10$



3 sets of  
3 bananas  
 $3+3+3=9$



3 sets of  
2 bananas  
 $2+2+2=6$



4 sets of  
3 bananas  
 $3+3+3+3=12$

Drag and drop the statement to match its picture

2 sets of 4 flowers

$$4+4=8$$

3 sets of 2 flowers

$$2+2+2=6$$

4 sets of 2 flowers

$$2+2+2+2=8$$

3 sets of 3 flowers

$$3+3+3=9$$

2 sets of 3 flowers

$$3+3=6$$

