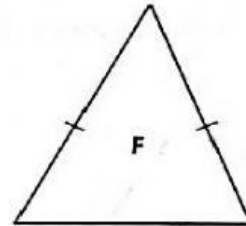
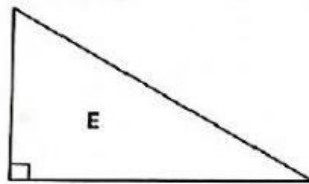
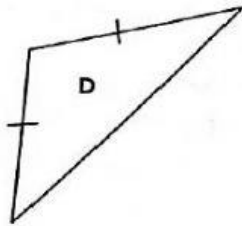
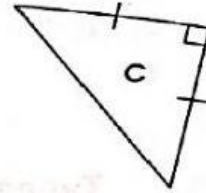
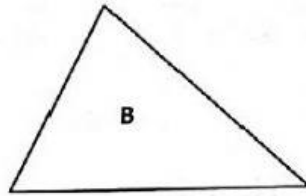
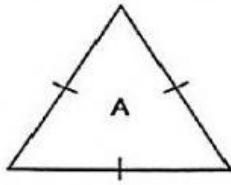


Triangles

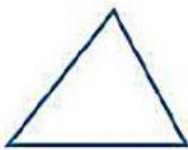
Fill in the blanks.



- (a) Triangle has 3 sides with equal lengths.
- (b) Triangles and are right-angled triangles.
- (c) Triangles , and have 2 sides with equal lengths.
- (d) Triangle C has equal sides.

Compare the angles of each triangle. Then circle the correct description.

3.



3 angles are less than a right angle

1 right angle.

4.



3 angles greater than a right angle

1 angle is greater than a right angle

