


## Assessment

Lesson title: faces, vertices, and edges

Question one: define the following terms: -

1. Faces:
2. Vertices:
3. and edges:


Question two: Define the names of these 3D shapes, then mention the number of vertices, edges, and faces of these shapes



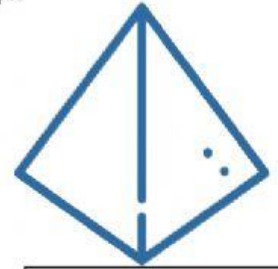
Name of the shape:  
Number of the vertices:  
Number of the edges:  
Number of the faces:



Name of the shape:  
Number of the vertices:  
Number of the edges:  
Number of the faces:



Name of the shape:  
Number of the vertices:  
Number of the edges:  
Number of the faces:



Name of the shape:  
Number of the vertices:  
Number of the edges:  
Number of the faces: